


Year 1 Maths Activity Mat: Autumn 1

Section 1

Colour in the squares.



Section 3

Match each number statement to the correct answer.

$6 + 4$

11

$10 - 6$

4

$7 + 4$

10

Section 6


Use a ruler to measure how tall the dinosaur is.



The dinosaur is ___ cm tall.

Section 4

Hannah has 6 football cards. She loses 1. How many does she have left?



Section 7

Write an addition statement for the picture.


 + =

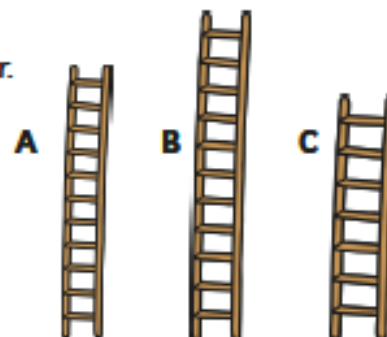
Section 2

1	2	3	4	5
---	---	---	---	---

$5 - 4 =$

Section 5

Circle the tallest ladder.



Section 8

Fill in the missing numbers.

